



Think together

1 Complete the sentences for each array.


a)



b)



c)



There are rows.


There are counters in each row.

There are counters in the array.


I wonder what the next array would look like.

2 Complete the sentences for each array.


a)



b)



c)



There are columns.

There are counters in each column.

There are counters in the array.



CHALLENGE

3 How many chocolates are in each row and column?

How many chocolates are in each box?

a)



b)



c)



There are chocolates in a row.

There are chocolates in a column.

There are chocolates in the box.

I will count up using the rows.



I wonder whether I will get the same answer if I count up using the columns.

