

Word Problems

Now you know how to measure using metres and centimetres, you can help the monsters solve some problems.

Webber needs to get a flag to the top of the flag pole. He pulls the rope to raise the flag. If he pulls the rope once, the flag goes up **one metre**.

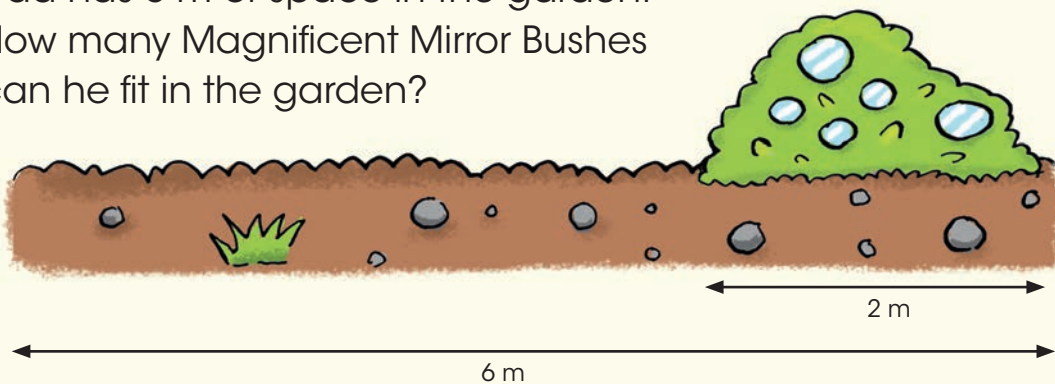
Webber pulls the rope **ten times** to get the flag to the top of the pole.

How high will the flag be at the top of the pole?
The flag will be **10 m high** when it gets to the top.



1

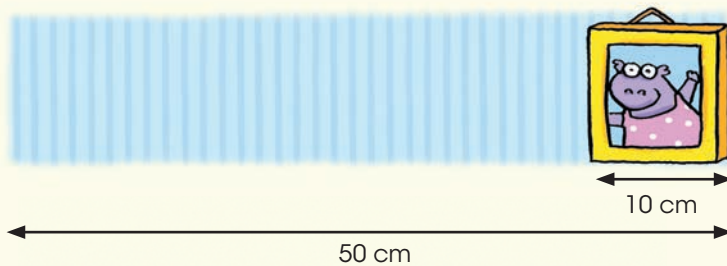
A Magnificent Mirror Bush is 2 m wide. Dad has 6 m of space in the garden. How many Magnificent Mirror Bushes can he fit in the garden?



Dad can fit Magnificent Mirror Bushes in the garden.

2 Mr Pepper has some photographs to hang in his office.
Each frame is 10 cm wide.

Mr Pepper has 50 cm of space on his wall.
How many photographs can he fit in?




Mr Pepper can fit photographs on the wall.

3 Webber is measuring the heights of Leckie and Zak.



Zak is 70 cm tall.



Leckie is 50 cm tall.

a Which pet is taller? is taller.

b How much taller? cm taller.

Fun Zone!

Find all the measurement words in this wordsearch.

Well done!
You can now find and colour **Shape 6** on the Monster Match page!

METRE
SHORT
RULER
TALL
WIDE
LONG

L	R	G	E	T	O	A	R
I	L	D	N	C	T	E	N
H	I	A	I	O	L	T	A
W	M	C	T	U	L	R	C
M	E	T	R	E	W	D	N
S	H	O	R	T	W	I	S
R	M	T	I	A	E	M	T
E	G	T	L	C	O	N	D