



Think together


1



Write the mass of each item in kilograms.


a) 
 kg

b) 
 kg

c) 
 kg

2

Mr Green has three crates.

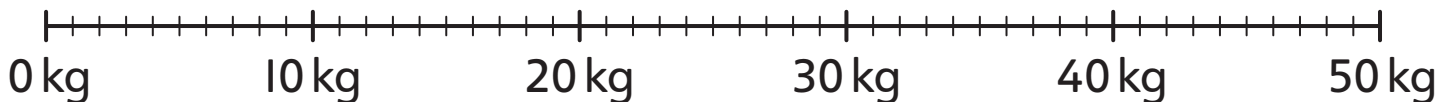


is five times as heavy as crate A.



is half as heavy as crate B.

What is the mass of each crate?




Crate A kg

Crate B kg

Crate C kg

CHALLENGE

3 How many grams is the same mass as 1 kg?



I will work out how many



there are in 5

