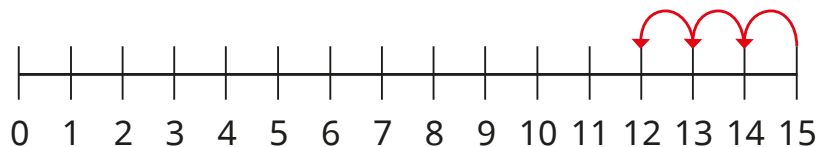


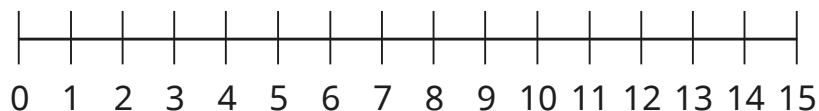
1 Ron uses a number line to work out $15 - 3$



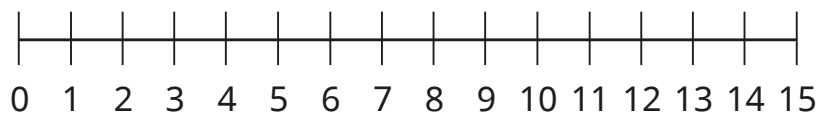
$15 - 3 = 12$

Use the number lines to help you work out the subtractions.

a) $14 - 3$



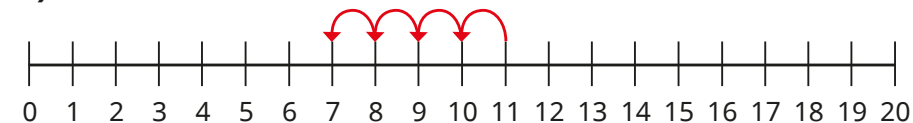
b) $15 - 4$



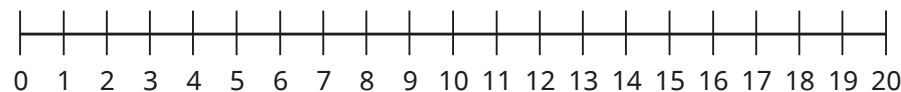
2 Use the number lines to work out the subtractions.



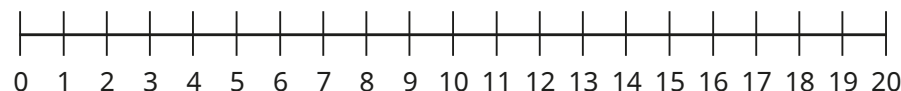
a) $11 - 4$



b) $16 - 9$



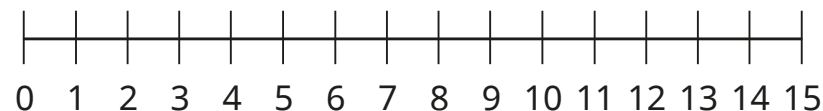
c) $14 - 11$



3 Dan has 15 stickers.




He gives 7 of his stickers to Kay.
How many stickers does he have now?



4 There are 13 toys in a box.



Ann takes some toys out of the box.
There are 5 toys left in the box.



How many toys does Ann take out of the box?

