
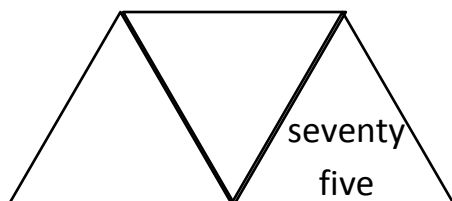
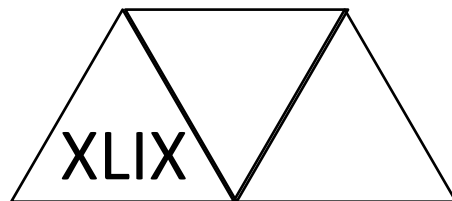
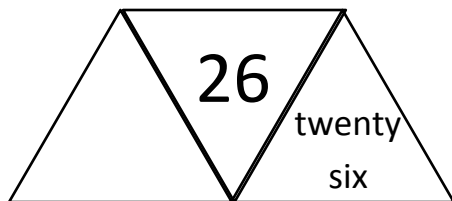



## Maths Homework: 06/09/19

### This Week- Roman numerals

Each diagram shows a number in numerals, words and Roman Numerals. Complete the diagrams.



**Last Week-** *Lucky for you, we didn't do anything last week!*



### Last Half Term- Comparing time in hours and minutes

Five friends run a race.

Their times are shown in the table.

Name	Time
Eva	114 seconds
Dexter	199 seconds
Teddy	100 seconds
Whitney	202 seconds
Ron	119 seconds

1. There are \_\_\_\_ seconds in two minutes.

2. Which child finished the race the closest to two minutes?

3. What was the difference between the fastest and slowest time? Give your answer in minutes and seconds.

### Arithmetic- Addition

$$\begin{array}{r} 223 \\ + 62 \\ \hline \end{array} \quad \begin{array}{r} 285 \\ + 12 \\ \hline \end{array} \quad \begin{array}{r} 488 \\ + 11 \\ \hline \end{array} \quad \begin{array}{r} 658 \\ + 31 \\ \hline \end{array} \quad \begin{array}{r} 757 \\ + 42 \\ \hline \end{array} \quad \begin{array}{r} 242 \\ + 22 \\ \hline \end{array}$$

$$\begin{array}{r} 264 \\ + 32 \\ \hline \end{array} \quad \begin{array}{r} 321 \\ + 71 \\ \hline \end{array} \quad \begin{array}{r} 226 \\ + 12 \\ \hline \end{array} \quad \begin{array}{r} 680 \\ + 18 \\ \hline \end{array} \quad \begin{array}{r} 455 \\ + 44 \\ \hline \end{array} \quad \begin{array}{r} 351 \\ + 35 \\ \hline \end{array}$$

$$\begin{array}{r} 452 \\ + 26 \\ \hline \end{array} \quad \begin{array}{r} 220 \\ + 39 \\ \hline \end{array} \quad \begin{array}{r} 868 \\ + 31 \\ \hline \end{array} \quad \begin{array}{r} 848 \\ + 41 \\ \hline \end{array} \quad \begin{array}{r} 417 \\ + 81 \\ \hline \end{array} \quad \begin{array}{r} 683 \\ + 11 \\ \hline \end{array}$$

## English Homework: 06/09/19

### Spelling- Words with /aw/ spelt 'augh' and 'au'.

z d t e l a u t h o r a  
 c a u g h t f f u j n a  
 m u h j j m h r e h n s  
 a g g w b j a a i z a t  
 t h h n t e e p d g u r  
 k t b r a c d p j f g o  
 i e w d u a w l l x h n  
 g r q h g u m a p g t a  
 v m s e h s s u j m y u  
 v w q e t e v d g k w t  
 e z a u t u m n q p r y  
 c l a u s e i e t x c b

caught  
 naughty  
 taught  
 daughter  
 autumn  
 clause  
 cause  
 astronaut  
 applaud  
 author

### Punctuation- Capital letters

Re-write the sentences below and add in the missing capital letters:

1. last saturday i went shopping in london.  
 \_\_\_\_\_
2. yasmin's favourite film is 'frozen'. She loves princess elsa!  
 \_\_\_\_\_
3. we always go trick-or-treating in october.  
 \_\_\_\_\_
4. can we go to nandos for dinner?  
 \_\_\_\_\_
5. have you read 'billionaire boy' by david walliams?  
 \_\_\_\_\_

### Grammar- Verbs

feeds horse painted cake napping  
 coat reads laugh grow umbrella shout  
 plays football fly pumpkin jump run  
 sing dance walk talk swim

Circle the verbs in the word bank.

1. Max \_\_\_\_\_ a game on the computer.
2. The baby is \_\_\_\_\_.
3. I \_\_\_\_\_ a picture for my Mum.
4. Tim \_\_\_\_\_ his favourite book every night.
5. Birds \_\_\_\_\_ in the sky.
6. I like to \_\_\_\_\_ in the sea.

Choose the correct verb to fill the gaps.

### Vocabulary

Find the definition of the following words:

**employee**

**aloof**

**reluctantly**

**anticipate**