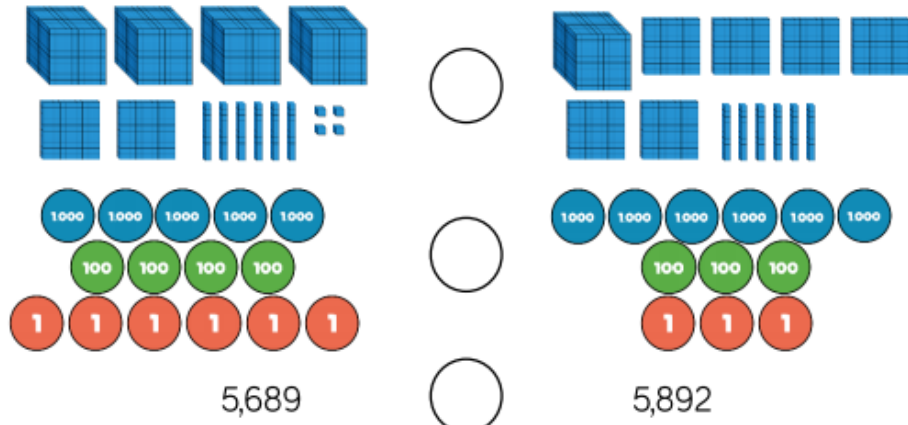


## Maths Homework: 20/09/19

### This Week- Place value: Comparing numbers beyond 1000

Complete the statements using  $<$ ,  $>$  or  $=$

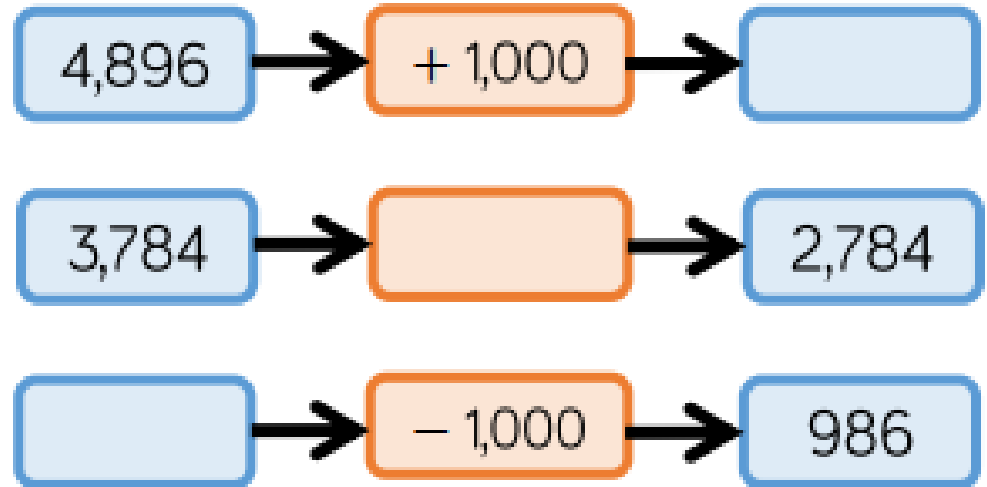


Circle the smallest amount in each pair.

- |  |       |
|--|-------|
| Two thousand, three hundred and ninety seven | 3,792 |
| 6,000 + 400 + 50 + 6                         | 6,455 |
| 9 thousands, 2 hundreds and 6 ones           | 9,602 |

### Last Week- Place value: 1000 more or less




1. Complete the missing boxes:



2. 10 less than my number is 1,000 more than 5,300.  
What is my number?

### Last Half Term- 12-hour and 24-hour times

Match the times to the clocks showing the same time:

9 o'clock in the morning		19:15
Half past 3 in the afternoon		09:00
Quarter past 7 in the evening		15:30



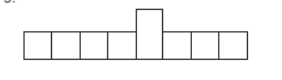
### Arithmetic- Multiplication

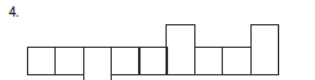
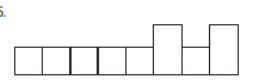
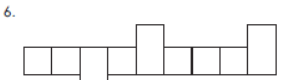
- |  |   |   |   |
|--|---|---|---|
| 1. $\begin{array}{r} 24 \\ \times 4 \\ \hline \end{array}$ | 2. $\begin{array}{r} 22 \\ \times 5 \\ \hline \end{array}$  | 3. $\begin{array}{r} 18 \\ \times 5 \\ \hline \end{array}$  | 4. $\begin{array}{r} 26 \\ \times 3 \\ \hline \end{array}$  |
| 5. $\begin{array}{r} 12 \\ \times 5 \\ \hline \end{array}$ | 6. $\begin{array}{r} 48 \\ \times 2 \\ \hline \end{array}$  | 7. $\begin{array}{r} 41 \\ \times 9 \\ \hline \end{array}$  | 8. $\begin{array}{r} 31 \\ \times 7 \\ \hline \end{array}$  |
| 9. $\begin{array}{r} 44 \\ \times 7 \\ \hline \end{array}$ | 10. $\begin{array}{r} 32 \\ \times 7 \\ \hline \end{array}$ | 11. $\begin{array}{r} 62 \\ \times 3 \\ \hline \end{array}$ | 12. $\begin{array}{r} 66 \\ \times 4 \\ \hline \end{array}$ |

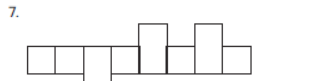
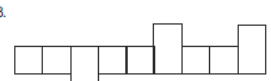

## English Homework: 20/09/19

### Spelling- Prefix 'im'

Fit each of the **im**- prefix words into the word frames:

1.  2.  3. 

4.  5.  6. 

7.  8.  9. 

**im**proper      **im**mortal      **im**polite      **im**perfect  
**im**mature      **im**movable      **im**patient      **im**portant

Choose one of the words and use it in a sentence below:

---



---

### Punctuation- Apostrophes for possession









Rewrite each sentence so it includes an apostrophe to show possession. The first one has been done for you.

**E.G. Connor is looking at the bike which belongs to Isla.**  
*Connor is looking at Isla's bike.*

1. The coat which belongs to Martin is hanging up in the hall.  
\_\_\_\_\_
2. The car that belongs to Lucy is the fastest car.  
\_\_\_\_\_
3. We all like playing with the dog that belongs to Luke.  
\_\_\_\_\_
4. The kittens which belong to Jack are very cute.  
\_\_\_\_\_

### Grammar- Determiners 'a' or 'an'

Circle the correct determiner used before each of these nouns. The first one has been done for you.

 a ball an	 a goat an	 a tree an	 a umbrella an
 a apple an	 a ant an	 a flower an	 a cat an

### Vocabulary- Word of the Week: **dreary**

<p><b>Definition:</b> <i>What does it mean?</i></p>	<p><b>Word class:</b> <i>Noun, verb, adjective, adverb etc.?</i></p>
<p><b>Synonyms:</b> <i>Word that mean the same.</i></p>	<p><b>Antonyms:</b> <i>Words that mean the opposite.</i></p>
<p><b>Sentence:</b> <i>Can you use the word correctly in a sentence?</i></p>	